



John Wesley Convent, Rohtak

Winter Vacation Home Work (2024-25)

Class : 1

Dear Parents

School will remain closed from January 01, 2025 to January 15, 2025 on account of Winter Break. The school will reopen on January 16, 2025.

Wish you all a very
Prosperous New Year



General Instructions:

- Do your Holidays Homework in a very neat and tidy manner.
- Parent should converse most of the time in English with their wards.
- Do the practice work in separate notebook.
- Kindly do the given assignment along with.

English

- Do the given assignment.
- Read one page of My Learning hub Daily.
- Revise Ch 10 & 11
- Make “sun” and “moon” puppets by taking help from pg no – 72 of My Learning Hub (Roll no. 1 To 10)
- Write a short poem on Sun, Moon or Stars on a half chart and put a nice border along the edge. (Roll no. 11 to 23)
- Draw or paste winter vegetables and fruits on a half chart. Also write their names. (Roll no 1 to 23)

Hindi:

1. जल के विभिन्न स्रोतों को चित्रों के माध्यम से चार्ट पर दर्शाए।(रोल नंबर 1-10)
2. भारत के विभिन्न मौसमों से संबंधित कपड़े व खाना चित्रों के माध्यम से चार्ट पर दर्शाए।(11-23)
3. ड और ङ की ध्वनियों का उच्चारण करते हुए उनके 10 शब्द व उन शब्दों से वाक्य बनाकर कार्य पुस्तिका में लिखिए।(रोल नंबर 1से10)
4. ढ और ढ़ की ध्वनियों का उच्चारण करते हुए उनके 10 शब्द व उन शब्दों से वाक्य बनाकर कार्य पुस्तिका में लिखिए। (रोल नंबर 11 से 23)
5. विशेषता बताने वाले शब्दों को चित्रों के माध्यम से चार्ट पर दर्शाए।
6. दी गई वर्कशीट्स को पूरा कीजिए ।

Maths:

- Make a chart of repeated additions. (Roll no 1-10)
Take help from page no -80 & 81.
- Make a chart showing different combination of money using dummy notes. (Upto rupees 100) (Roll no- 11 -23)
- Do at least 6-6 sums of Addition and Subtraction in Notebook.
- Learn and Write tables of 2 to 10 in a notebook.
- Do the given assignment.

G.K.:

- Learn Topic - Knowing India.
- Visit any historical place with your parents, make a chart by pasting the picture of it and writing about it.(Roll no. 1 to 10)
- Paste pictures of different birds along with name on a half chart. (Roll no 11 to 23)
- Paste the pictures of our current Prime Minister President, vice president and CM of Haryana on a half chart. (Roll no 1 to 23)

I.T.:

- Revise Topic-Internet and explore the topic by watching videos with the help of your parents.
- Draw or paste logos of social media with names on a half chart.(Roll no 1 to 10)
- Draw or paste different parts of computer and write their uses on a half chart. (Roll no. 11 to 23)

Art and Craft:

- Make a Wind Chime by taking the help from (page no 55) (roll no 1 to 15)
- Make a Pinwheel by taking the help from (page no 54) (roll no 16 to 23)

E.V.S. :

- Revise Chapter-15 & 16 (complete)
- Make a small poster with the title, “save Earth” (Roll no 1-10)
- Make a beautiful chart showing night sky. (Roll no-11 -23)
- Make a scene of day sky using clay on a cardboard. (Roll no-1 -23)



John Wesley Convent, Rohtak


(A New Generation International Sr. Sec. School, Affiliated to C.B.S.E.)

Class..... Section.....

Name: _____ Roll No.: _____ Topic : _____

Fill in the blanks with "is", "am" or "are".

1. Her name _____ Tess.
2. I _____ hungry and tired.
3. You _____ late, Tommy!
4. Our class teacher _____ nice and friendly.
5. The kids _____ naughty.
6. Your jokes _____ funny.
7. Brenda _____ a happy girl.
8. Your house _____ very big.
9. We _____ sleepy.
10. This bag _____ heavy.
11. Tiffany and Holly _____ my sisters.
12. That girl _____ pretty.
13. It _____ an exciting movie.
14. The mangoes _____ sweet.
15. My brother _____ a fireman.





John Wesley Convent, Rohtak

(A New Generation International Sr. Sec. School, Affiliated to C.B.S.E.)


Class..... Section.....

Name: _____ Roll No.: _____ Topic : _____



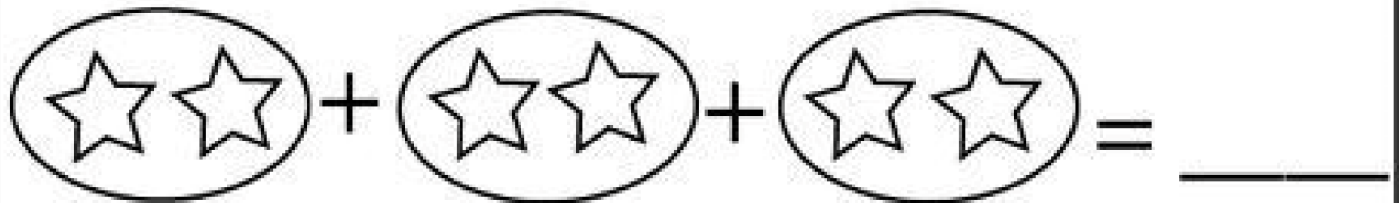
How many groups? 2

How many in each group? 3 2 x 3 = 6



How many groups? _____

How many in each group? _____ 2 x 5 = _____



How many groups? _____

How many in each group? _____ 3 x 2 = _____



How many groups? _____

How many in each group? _____ 4 x 1 = _____



John Wesley Convent, Rohtak

(A New Generation International Sr. Sec. School, Affiliated to C.B.S.E.)

Class..... Section.....

Name: _____ Roll No.: _____ Topic : _____



STATEMENT SUMS ON SUBTRACTION




There were 6 dogs.
4 dogs ran away.
How many dogs were left?





$$\begin{array}{r} 6 \\ - 4 \\ \hline \end{array}$$



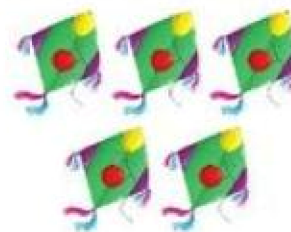
There were 5 butterflies.
2 butterflies flew away.
How many butterflies were left?



There were 7 ducks.
4 ducks went away.
How many ducks were left?



I had 7 kites.
I lost 5 kites.
How many kites were left with me?



There were 4 rats near the bowl.
2 rats ran away.
How many rats were left near the bowl?





John Wesley Convent, Rohtak

(A New Generation International Sr. Sec. School, Affiliated to C.B.S.E.)

Class..... Section.....

Name: _____ Roll No.: _____ Topic : _____

चित्र व्याख्या (PICTURE EXPLANATION)

नीचे दिए गए चित्र को पहचानकर खाली स्थान में सही उत्तर चुनकर लिखिए।

Identify the picture given below and write the correct answer in the blank space.



खेल	मज़ा	गेंद	पार्क	दो
-----	------	------	-------	----

1. यह एक है।
2. लड़का पार्क में रहा है।
3. लड़के के पास एक है।
4. वह कुत्तों के साथ खेल रहा है।
5. लड़के को बहुत आ रहा है।




John Wesley Convent, Rohtak

(A New Generation International Sr. Sec. School, Affiliated to C.B.S.E.)

Class..... Section.....

Name: _____ Roll No.: _____ Topic : _____



JACK and TOM are hunters. They caught some animals and put them in a zoo.

Help the Tom and Jack for counting the animals:

Answer the following :

1. Who are more in number ?

2. Who are less in number ?

3. Which animals are same in number ?

_____ , _____

4. What is your opinion about hunting animals ?

	Animal	Number
1	Lion	
2	Tiger	
3	Panda	
4	Penguin	
5	Parrot	



John Wesley Convent, Rohtak

(A New Generation International Sr. Sec. School, Affiliated to C.B.S.E.)

Class..... Section.....

Name: _____ Roll No.: _____ Topic : _____

Q2. Look at the picture and identify which festival is being celebrated by the children? Also, write 4 sentences about it.



.....

.....

.....

.....

Q3. Read the following lines and answer the given questions-

The New Bicycle

Emma has a new bicycle. It is bright, pink and shiny. It was a gift from her uncle. He hid it behind a bush to surprise her. When Emma saw the bicycle, she jumped with joy. She gave her uncle a big hug and thanked him. She loves her new bicycle.

a) How is Emma's new bicycle?

b) Where was the bicycle hidden?

c) Write any two-

- 1) **Naming words** _____
- 2) **Describing words** _____
- 3) **Action words** _____



c) Who gifted the bicycle?
