



John Wesley Convent, Rohtak


Summer Vacation Home Work (2019-20)

Class : 3



Hurrah!

Break Time.....



General Instructions:

- Do your holidays homework in a very neat and tidy manner.
- Do the written work in separate notebook.
- Parents should converse most of the time in English with their wards.
- Submission date for the assignment till **3rd July 2019**.

Note:- The school will remain closed from **25th May, 2019** to **30th June, 2019** and will reopen from **1st July 2019**.

Do the work given in separate note book.



English:

1. Revise chapter - 2 & 3 from students book, workbook and note book.
2. Collect the picture of the fruits and vegetables which resemble our body parts and paste them in a scrap book. Explain each picture in five lines. (Roll No. 1 to 15)
3. Mention your favourite sport. Make a poster on safety rules of that sport. Paste relevant pictures. (Roll No. 16 Onwards)
4. Do the given assignment:
On topic: Countable & Uncountable Nouns

Maths:

1. Solve 'Do it Now', 'Challenge part' and fun task in holidays home work note book.
2. Do the given worksheet
3. Learn tables 2 to 15 and write all tables using different colours on A3 sheet and give it a cardboard base.

Project work

1. Use different 2D shapes to draw a scene (eg. Hut, Cartoon etc) (Roll No. 1 to 8)
2. Draw 2D shapes on A3 sheet and write down their properties. (Roll No. 9 to 16)
3. List down the object which include various mathematical shapes in it on half chart. (Roll No. 17 to 24)
4. Construct a pyramid of cuboids/cubes. (Roll No. 25 onwards)

Hindi:

1. प्रतिदिन एक सुलेख लिखें।
2. रिमझिम के पाठ 3 व 4, विलोम शब्द, अनुच्छेद व पत्र याद करें।
3. संज्ञा व संज्ञा के भेद को A3 शीट पर दर्शाए (रोल न० 1 से 15)
4. सुंदर मुखौटा बनाए (रोल न० – 16 से 30)
5. 'र' के विभिन्न रूप
'र' रेफ (र) जैसे पर्व, पाई के नीचे तिरछा जैसे – (ळ) क्रम, व्यंजन के नीचे (र) के रूप में जैसे :
ट्रक आदि पर 15 शब्दों से A3 शीट पर वृक्ष बनाए।

Science:

1. Make a terrarium using materials available around us. Take a clear glass bowl and rinse it clean, hit it dry. Now, add some gravel crushed charcoal and two handfuls of potting soil. Add one or two small plants in the soil.
Paste 3-3 pictures of animals of each category herbivores, carnivores and omnivores on a chart paper and write their names. (Roll No. 16 onwards)

G.K:

1. Revise
Topic-1 (More About India)
Topic-2 (More About Haryana)
Topic-3 (Famous Structures)
Topic-4 (About Currency)
2. Write any five current affairs of the month of May and June each.
3. Paste pictures of any 10 Monuments of India in scrap book. (Roll No. 1 to 15)
4. Paste pictures of currencies of different countries on A-3 size sheet. (Roll No. 16 to 30)

Social Studies:

1. Revise Ch-1,2,3,4, and write atleast 10 internal questions and their answers from each chapter in holidays homework notebook.
2. Practice 5 political maps of India and show all states and paste them in your holidays homework notebook.
3. Fill in details about you in your holidays homework notebook.

Name	
Height	
Weight	
Blood Group	
Eye Sight	
Vaccines Administered	
Hemoglobin	

4. (i) Prepare a poster on : Traffic lights. (Roll No. 1 to 10)
(ii) Make a chart on : Road Safety Rules. (Roll No. 11 to 20)
(iii) Prepare flash cards on : neighbourhood places carrying detailed information. (Roll No. 21 onwards)
5. Watch movie 'Taare Zameen Par and write answer of the following questions in h. homework notebook.
(i) What were the struggles of child Ishaan Awasthi?
(ii) What were the qualities of Teacher Ram Shankar Nikumbh?
(iii) What were the changes in Ishaan Awasthi's Performance by the end of the movie?

Art & Craft:- Any three items should be done.

1. Using pencil shavings make a greeting card.
2. Create a beautiful scene with thumb painting.
3. Create a beautiful scene with match sticks on black chart.

I.T:

1. Prepare a PPT on the topic "Uses of computers" (5 slides) & forward on mail id. (jwc.hhw@gmail.com)
2. Prepare a chart on ¼ chartsheet:
(a) Windows 7 Desktop (given on pg. 18) (Roll No. 1 to 10)
(b) Advantages of Computers. (Roll No. 11 to 20)
(c) Tux Paint Tools (any 7) (Roll No. 21 Onwards)
3. Learn Ch-1 & 2

John Wesley Convent, Rohtak

Summer Vacations Home Work (2019-20)

English Assignment

Class - III

Exercise 1

Given below is a list of nouns. Sort them into two groups: Countable nouns and Uncountable nouns. Write them in the correct boxes :

book, hair, kindness, glass, stone, bag,
beauty, sugar, powder, oven, box, rice

Countable Nouns



Uncountable Nouns

Exercise 2

Fill in the blanks to make phrases of quantity. Choose the correct word from the box :

loaves, sheet, piece, speck, drop,
pane, cube, cup, slices, string

- | | |
|----------------------|------------------------|
| (1) a of beads | (2) two of bread |
| (3) a of chalk | (4) a of tea |
| (5) a of paper | (6) a of water |
| (7) a of sugar | (8) two of cake |
| (9) a of dust | (10) a of glass |

Exercise 3

Correct the sentences given below and rewrite them :

(1) I have long black hairs.

(2) These tables are made of woods.

(3) Please give me some white chalks

(4) I want two tins of oils.

(5) Rains, rains go away.

John Wesley Convent, Rohtak

Summer Vacations Home Work (2019-20)

Social Study Assignment

Class - III

Answer the following questions in given space:-

- | | |
|--|-------|
| Q.1 Which is the highest airport in India? | _____ |
| Q.2 Which is the highest battle field and the longest Glacier? | _____ |
| Q.3 Which is the largest Planetarium in India? | _____ |
| Q.4 Which is the deepest River valley in India? | _____ |
| Q.5 Which is the largest Artificial lake in India? | _____ |
| Q.6 Which is the largest River without delta in India? | _____ |
| Q.7 Which is the longest dam of India? | _____ |
| Q.8 Which is the longest passenger train route in India? | _____ |
| Q.9 Which is the biggest church in India? | _____ |
| Q.10 Which is the highest road in India? | _____ |
| Q.11 Which is the largest cave in India? | _____ |
| Q.12 Which is the highest lake in India? | _____ |
| Q.13 Which is the longest river in Southern India? | _____ |
| Q.14 Which is the longest sea beach in India? | _____ |
| Q.15 Which is the largest sea bridge in India? | _____ |
| Q.16 Which is the longest canal in India? | _____ |
| Q.17 Which is the biggest stadium in India? | _____ |
| Q.18 Which is the longest highway in India? | _____ |
| Q.19 Which is the state of India that have the longest coast line? | _____ |
| Q.20 Which is the longest river Bridge in India? | _____ |
| Q.21 Which is the largest animal fair in India? | _____ |
| Q.22 Which is the largest auditorium in India? | _____ |
| Q.23 Which is the largest lake in India? | _____ |
| Q.24 Which is the highest dam in India? | _____ |
| Q.25 Which is the largest desert of India? | _____ |
| Q.26 In India, which is the largest cave temple? | _____ |
| Q.27 Which is the largest zoo in India? | _____ |
| Q.28 Which is the largest mosque in India? | _____ |
| Q.29 Which is the India's highest peak? | _____ |
| Q.30 Which is the highest Hinnel in India? | _____ |
| Q.31 Which is the largest delta of India? | _____ |
| Q.32 Which state of India has the maximum forest area? | _____ |
| Q.33 Which is the longest corridor in India? | _____ |
| Q.34 Which is the highest waterfall in India? | _____ |
| Q.35 Which is the longest road in India? | _____ |
| Q.36 Which is the largest museum of India? | _____ |
| Q.37 Which is the longest railway platform of India? | _____ |
| Q.38 Which is the highest Gallantly Award in India? | _____ |
| Q.39 Which is the most popular city of India? | _____ |
| Q.40 Which is the largest public sector bank in India? | _____ |

John Wesley Convent, Rohtak

(Assignment No. 2)

Date of Issue: 24-05-2019

Topic: Holidays Home Work

Sub: Maths

Name: _____

Class: III

Marks Obt: _____

A. Find the larger number in each pair.

Number	Answer
a. 50 hundreds or 501 tens	
b. 30 hundreds or 310 tens	
c. 200 ones or 2 tens	
d. 30 hundreds or 300 ones	
e. 7 thousands or 700 ones	

B. In the number 9,23,485 write:

- The digit in the units place:
- The digit in the thousands place:
- The place value of 9:
- The place value of 2:
- The place value of 8:

C. Write the place value of the number that has been bolded:

- | | |
|-------------|-------------|
| 1. 58,300 | 5. 9,24,620 |
| 2. 6,23,391 | 6. 1,85,987 |
| 3. 1,85,218 | 7. 2,23,540 |
| 4. 7,98,456 | 8. 1,00,456 |

D. Find the difference in the place values of 5 in:

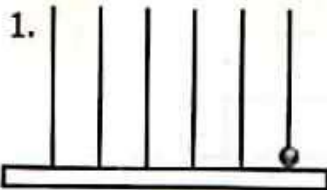
- 56,125
- 55,423

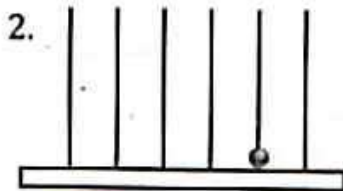
E. Find the sum of the place values of 5 in:

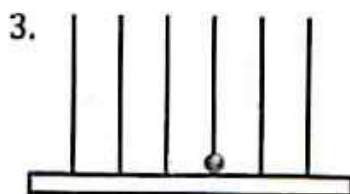
- 7,505
- 75,456

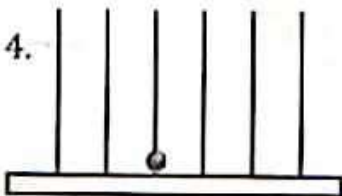
Place value and Abacus

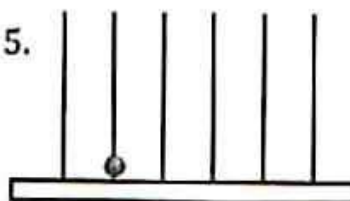
Identify the value of the bead in each figure. Note that the value of the bead changes with its place on the abacus.














Name: _____

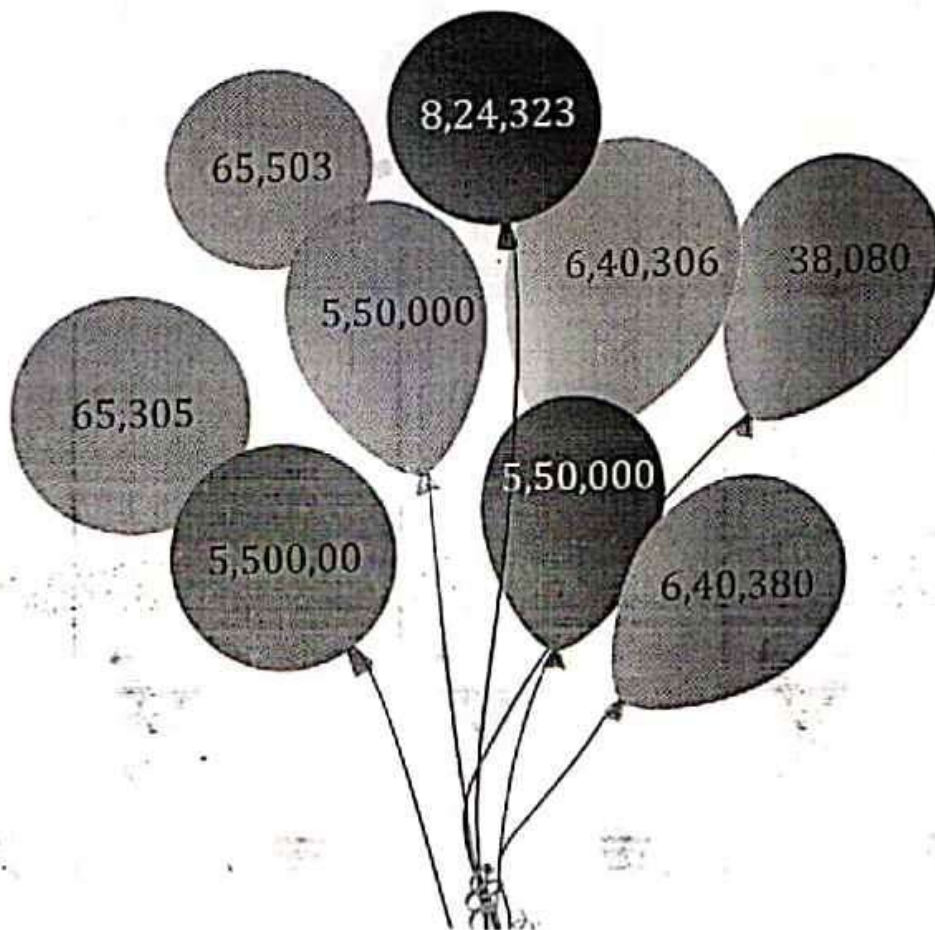
Class: III

Marks Obt: _____

Numbers

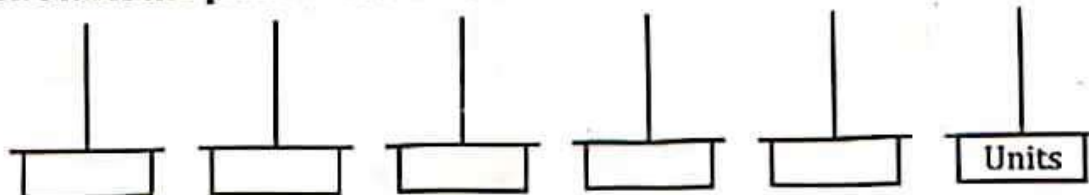
A. Colour the balloons blue after reading the numbers:

1. Sixty five thousand three hundred and five.
2. Thirty eight thousand and eighty.
3. Five lakh fifty thousand.
4. Eight lakh twenty four thousand three hundred and twenty three.
5. Six lakh forty thousand three hundred and eighty.

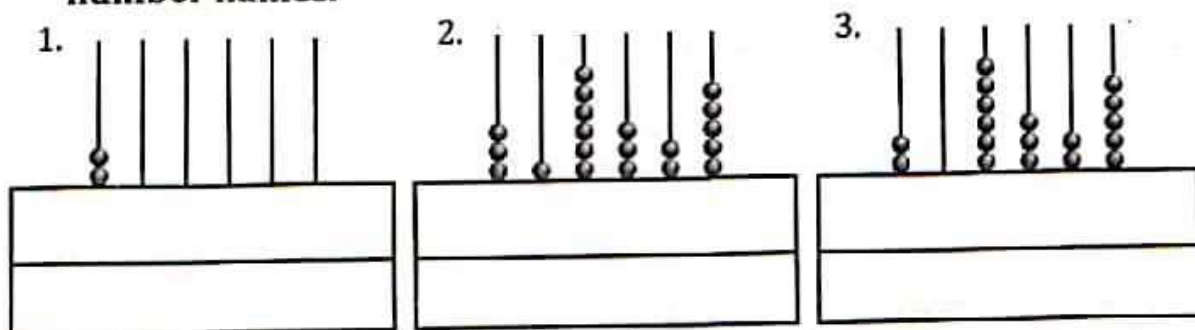


Abacus Reading

A. Mark the places on the abacus.



B. Write the numbers shown in the abacus both in figures and number names.



C. Draw the beads on the abacus to show the numbers.

