



# John Wesley Convent

Plot No. 5, Gohana Road (Opp. Makroli Toll Plaza) Rohtak-124001

Contact us.: 92541-22533, 92543-22533

## Winter Holidays Homework (2019-20)

### Class – III

### Wish you all a very Prosperous New Year

Dear Parents

School will remain close from 1<sup>st</sup> January, 2020 to 10<sup>th</sup> January, 2020 on account of Winter Break. The school will re-open on 11<sup>th</sup> January, 2020.

#### General Instruction:

- Do your Holiday Home Work in a very neat and tidy manner.
- Parents should converse most of the time in English with their wards.

**English:** \* Read Ch-11 and underline all the adjective in the chapter.  
\* Do Work sheet 1 of pg 109, 110 in workbook.

**Maths:** \* Solve the given worksheet.  
\* Learn tables 2 to10  
\* Revise 3- digits division sums in practice note book (daily two sums)

**Science:** \* We are the part of this universe and whatever happens around us has a reason behind it and we must know the causes that are responsible for them. Children should know about the processes occurring in their environment and the celestial bodies present in cosmos.

- Complete your note book and revise all the syllabus done till date.
- List all the processes used to get the different forms of water.
- Find information about solar system and find why 'Pluto' is not a planet.

**Note: (Do all the work in Science note book)**

**S.St:** \* Our earth is a unique planet. However, it is being polluted by human activities. We must create awareness among the students related to environment and we must save this earth for the future generations.

- Pen down your ideas which can give message about saving our earth in 100/150 words.
- On an outline map (Political Map of World) label all the continents.
- Revise all the syllabus done till date.

**Note:** Do all the work in S. Science note book.

**Hindi:** \* पाठ—12, 13 व कहानी ही कहानी (पेज—100) पढ़ो।  
\* “जल की उपयोगिता” पर अनुच्छेद डिजाइनर हिंदी A4 शीट पर लिखें।

**I.T:** \* Revise Ch-5, 6, 7  
\* Read Ch-8, 9 and find internal questions (at least 10) and write in a separate note book.

**G.K:** \* Revise Topic Birds watch.  
\* Write 15 current affairs for the month of December and January respectively.

**A&C:** \* Draw two different types of tree and two different types of hut and colour them with pastel colour.  
\* Make any craft item with pencil shavings.



# John Wesley Convent, Rohtak

## Winter Break Holidays Home Work Practice Assignment

Subject: Mathematics

Class :III

Solve the sums in given blocks:

1. Paste dummy note of Rs.10, Rs.20, Rs.50, Rs.100, Rs.500 and Rs.200 in fair Notebook.

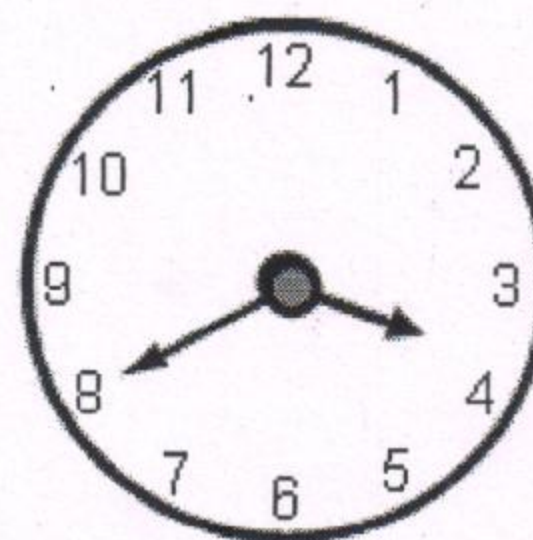

2. Add the following:

Rs.	P	Rs.	P
50	03	82	60
+ 30	21	80	20
<div></div>		<div></div>	

3. Subtract the following:

Rs.	P	Rs.	P
75	35	45	38
- 35	12	20	10
<div></div>		<div></div>	

4. Write the time shown in the clock:



5. Which fraction of the Indian flag is coloured green?

6. If something is divided into 4 equal parts, each part is called a:

(a) Half                      (b) Quarter                      (c) One-eight                      (d) Whole

7. The distance from Ram's house to his school is 5 km. What is the distance in metres?



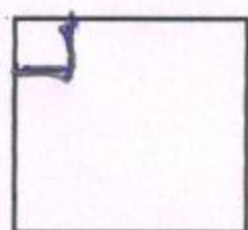
8. Write the next three numbers in the pattern:

(a) 25, 20, 15, \_\_\_\_\_, \_\_\_\_\_, \_\_\_\_\_

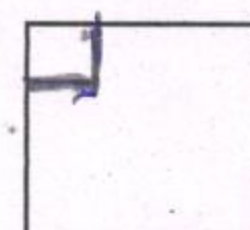
(b) 1, 4, 7, 10, \_\_\_\_\_, \_\_\_\_\_, \_\_\_\_\_, \_\_\_\_\_

(c) 20, 17, 14, \_\_\_\_\_, \_\_\_\_\_, \_\_\_\_\_

9. Fill in the shape to complete the pattern:



\_\_\_\_\_



10. Fill in the blanks:

(a) Fifteen rupees and fifty paise in number form is \_\_\_\_\_

(b) 1 hour = \_\_\_\_\_ minutes

(c) 1 m = \_\_\_\_\_ cm